

Telling Time to the Half Hour

Home Link 4-1

NAME _____


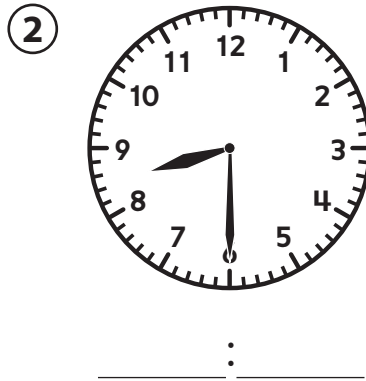
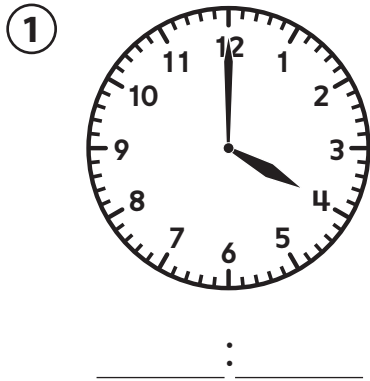
DATE _____

Family Note

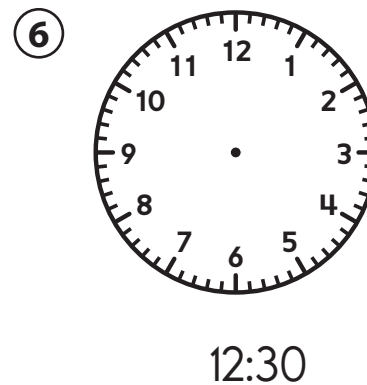
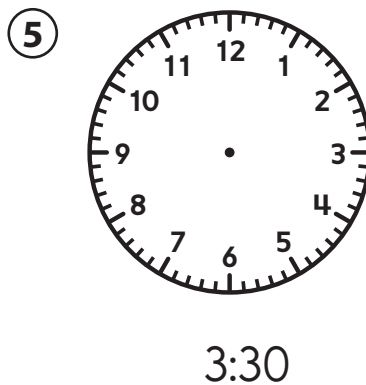
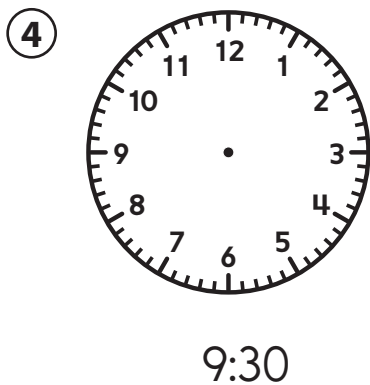
Today we reviewed telling and writing times to the hour and half hour on an analog clock. We discussed the movement of the hour and minute hands and units of time such as hour and minute.

Please return this Home Link to school tomorrow.

Write the time shown on each clock.



Draw the hour hand and the minute hand to show the time.



Practice

⑦ $6 + 5 = \underline{\quad}$

⑧ $\underline{\quad} + 3 = 7$

⑨ $7 + \underline{\quad} = 13$

⑩ $\underline{\quad} = 8 + 8$